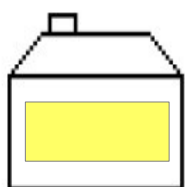
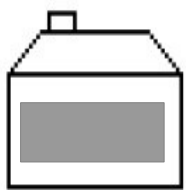


## Exercice de logique à 1 inconnue

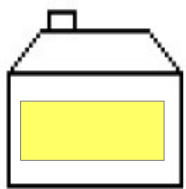
## Exercice de logique à 1 inconnue 2



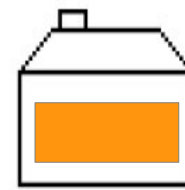
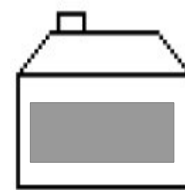
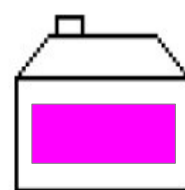
## Exercice de logique à 1 inconnue 3



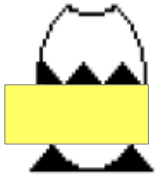
## Exercice de logique à 1 inconnue 4




## Exercice de logique à 1 inconnue 5



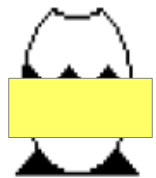
## Exercice de logique à 1 inconnue 6



## Exercice de logique à 1 inconnue 7



## Exercice de logique à 1 inconnue 8



## Exercice de logique à 1 inconnue 9

